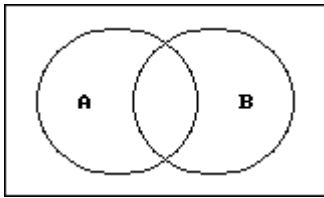
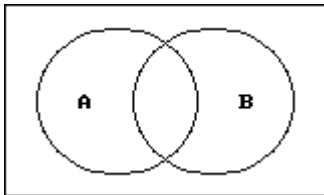


Shade the portion of the diagram that represents the given set.

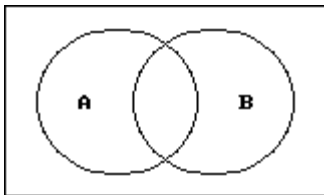
1) A



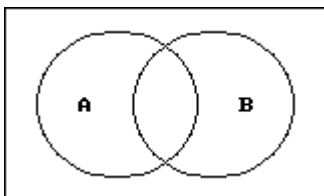
2) B



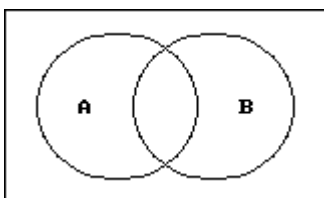
3) $A \cap B$



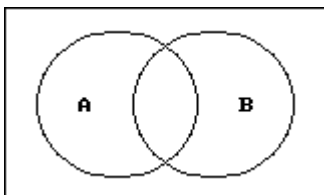
4) $A \cup B$



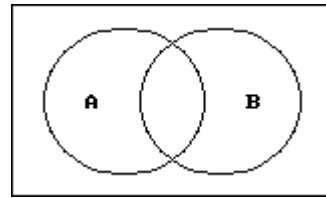
5) $A - B$



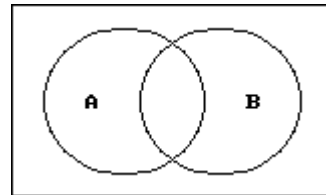
6) $B - A$



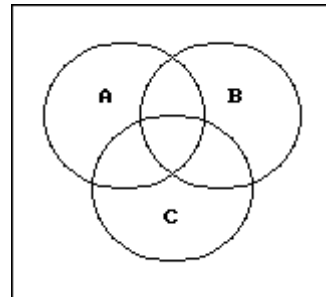
7) \bar{A}



8) \bar{B}



9) \bar{A}



10) $B - C$

